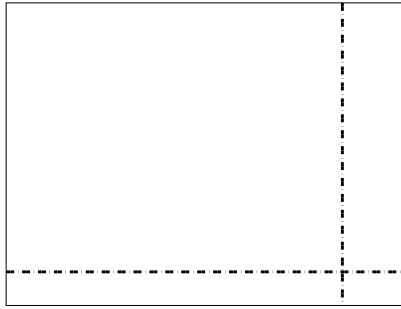


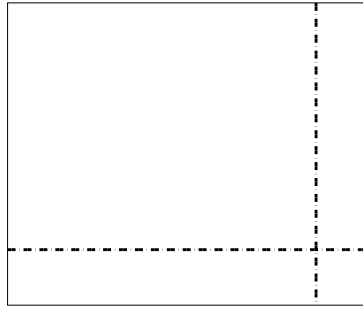


Use the array provided to solve each problem.


1) $45 \times 59 =$




2) $49 \times 59 =$




3) $39 \times 16 =$




4) $37 \times 13 =$



5) $37 \times 48 =$



6) $37 \times 14 =$



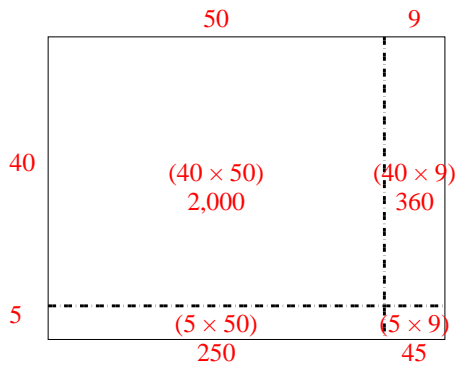
Answers

- 1. _____
- 2. _____
- 3. _____
- 4. _____
- 5. _____
- 6. _____

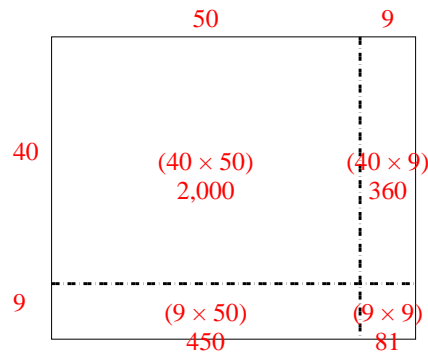


Use the array provided to solve each problem.

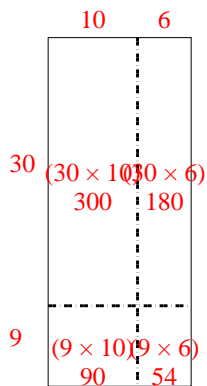
1) $45 \times 59 =$



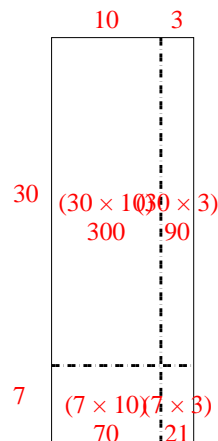
2) $49 \times 59 =$



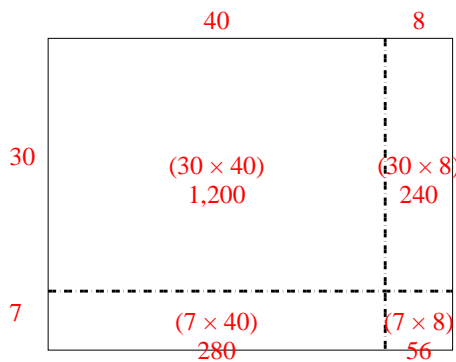
3) $39 \times 16 =$



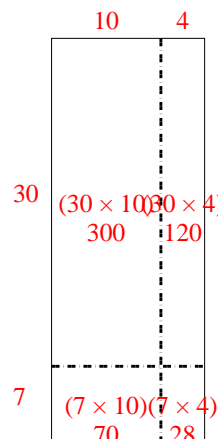
4) $37 \times 13 =$



5) $37 \times 48 =$



6) $37 \times 14 =$



Answers

1. 2,655

2. 2,891

3. 624

4. 481

5. 1,776

6. 518